






Problem Solving

Amir has three number cards.



 is 12 less than 

 is 32 more than 

 is equal to 25

What is the sum of the three cards?

[illegible]