



Name:..... Date:.....

Arrays


Write a number sentence for the array. One has been done for you.




$3 \times 2 = 6$




..... \times =



..... \times =




..... \times =




..... \times =



..... \times =



..... \times =



..... \times =

Odd or Even

Circle all the odd numbers.

