




# Problem Solving

Complete the final calculation.

 +  = 16

 +  = ||



$\triangle - \bigcirc =$

[illegible]